

# 12 Times Table Activities

Count in 12s and colour in the grid:

1	2	3	4	5	6	7	8	9	10
11	12	13	14	15	16	17	18	19	20
21	22	23	24	25	26	27	28	29	30
31	32	33	34	35	36	37	38	39	40
41	42	43	44	45	46	47	48	49	50
51	52	53	54	55	56	57	58	59	60
61	62	63	64	65	66	67	68	69	70
71	72	73	74	75	76	77	78	79	80
81	82	83	84	85	86	87	88	89	90
91	92	93	94	95	96	97	98	99	100
101	102	103	104	105	106	107	108	109	110
111	112	113	114	115	116	117	118	119	120
121	122	123	124	125	126	127	128	129	130
131	132	133	134	135	136	137	138	139	140
141	142	143	144	145	146	147	148	149	150


Work out these answers:

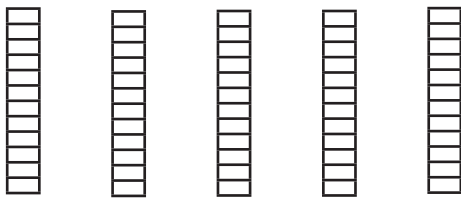
a)  $4 \times 12 =$  \_\_\_\_\_ d)  $6 \times 12 =$  \_\_\_\_\_

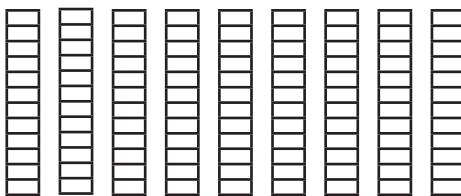
b)  $8 \times 12 =$  \_\_\_\_\_ e)  $7 \times 12 =$  \_\_\_\_\_

c)  $5 \times 12 =$  \_\_\_\_\_ f)  $9 \times 12 =$  \_\_\_\_\_

How many blocks are there?

a)  \_\_\_\_\_  $\times$  \_\_\_\_\_ = \_\_\_\_\_

b)  \_\_\_\_\_  $\times$  \_\_\_\_\_ = \_\_\_\_\_

c)  \_\_\_\_\_  $\times$  \_\_\_\_\_ = \_\_\_\_\_